



المادة: statistics 2	المرحلة: إجازة
المدة: ساعتين	السنة: 2023
اسم الأستاذ: د. حسين نصار	الاختصاص: علوم البيان

Answer ALL the following questions:

Question 1 (20 points):

Fry Brothers Heating and Air Conditioning Inc. employs Larry Clark and George Murnen to make service calls to repair furnaces and air conditioning units in homes. Tom Fry, the owner, would like to know whether there is a difference in the mean number of service calls they make per day. Assume the population standard deviation for Larry Clark is 1.05 calls per day and 1.23 calls per day for George Murnen. A random sample of 40 days last year showed that Larry Clark made an average of 4.77 calls per day. For a sample of 50 days George Murnen made an average of 5.02 calls per day. At the .05 significance level, is there a difference in the mean number of calls per day between the two employees?

Question 2 (15 points):

A local education services group selected a sample of 25 classes and found out that the correlation between the number of students participating in the class and the number of people living in the area where the class is given is 0.94. Using the .05 significance level, can we conclude that there is a positive association between the two variables?

Question 3 (15 points):

For a sample of 32 large U.S. cities, the correlation between the mean number of square feet per office worker and the mean monthly rental rate in the central business district is -0.363 . At the .05 significance level, can we conclude that there is a negative association in the population between the two variables?

Question 4 (20 points):

A researcher concluded that there is a relationship between the number of hours a students study and the overall grade in the exam.

- a) What are the independent and dependent variables in this example

- b) Write a regression line, which explain the relation between the variables. (assume the slope is equal to 2 and intercept is equal to 30).
- c) Assume a student studies 20 hours for exam. What is his predicted grade?

Question 5 (30 points):

The fuel efficiencies for a sample of 27 compact, midsize, and large cars are entered into a statistical software package. Analysis of variance is used to investigate if there is a difference in the mean mileage of the three cars.

Summary				
Groups	Count	Sum	Average	Variance
Compact	12	268.3	22.35833	9.388106
Midsize	9	172.4	19.15556	7.315278
Large	6	100.5	16.75	7.303

Additional results are shown below.

ANOVA					
Source of Variation	SS	df	MS	F	p-value
Between Groups	136.4803	2	68.24014	8.258752	0.001866
Within Groups	198.3064	24	8.262766		
Total	334.7867	26			

- a) What do you conclude? Use the .01 significance level.
- b) Is there a difference between the compact and the large size cars?

Formulas (you may use SOME or ALL the formulas below):

$$z = \frac{\bar{x}_1 - \bar{x}_2}{\sqrt{\frac{\sigma_1^2}{n_1} + \frac{\sigma_2^2}{n_2}}} \quad (11-2)$$

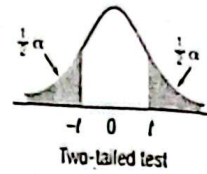
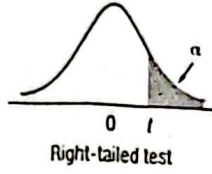
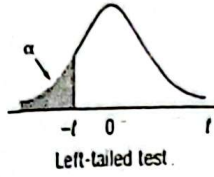
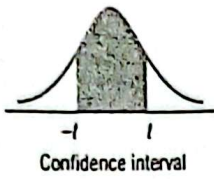
$$t = \frac{\bar{x}_1 - \bar{x}_2}{\sqrt{s_p^2 \left(\frac{1}{n_1} + \frac{1}{n_2} \right)}} \quad (11-4)$$

$$r = \frac{\sum(X - \bar{X})(Y - \bar{Y})}{(n - 1)s_x s_y}$$

$$t = \frac{r\sqrt{n - 2}}{\sqrt{1 - r^2}}$$

CONFIDENCE INTERVAL FOR THE DIFFERENCE IN TREATMENT MEANS $(\bar{x}_1 - \bar{x}_2) \pm t \sqrt{\text{MSE} \left(\frac{1}{n_1} + \frac{1}{n_2} \right)}$ (12-5)

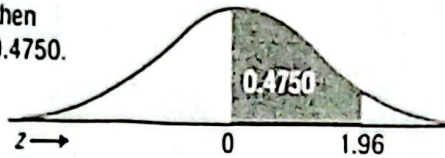
Tables:




Confidence Intervals, c						
df	80%	90%	95%	98%	99%	99.9%
	Level of Significance for One-Tailed Test, α					
	0.10	0.05	0.025	0.01	0.005	0.0005
	Level of Significance for Two-Tailed Test, α					
	0.20	0.10	0.05	0.02	0.01	0.001
1	3.078	6.314	12.706	31.821	63.657	636.619
2	1.886	2.920	4.303	6.965	9.925	31.599
3	1.638	2.353	3.182	4.541	5.841	12.924
4	1.533	2.132	2.776	3.747	4.604	8.610
5	1.476	2.015	2.571	3.365	4.032	6.869
6	1.440	1.943	2.447	3.143	3.707	5.959
7	1.415	1.895	2.365	2.998	3.499	5.408
8	1.397	1.860	2.306	2.896	3.355	5.041
9	1.383	1.833	2.262	2.821	3.250	4.781
10	1.372	1.812	2.228	2.764	3.169	4.587
11	1.363	1.796	2.201	2.718	3.106	4.437
12	1.356	1.782	2.179	2.681	3.055	4.318
13	1.350	1.771	2.160	2.650	3.012	4.221
14	1.345	1.761	2.145	2.624	2.977	4.140
15	1.341	1.753	2.131	2.602	2.947	4.073
16	1.337	1.746	2.120	2.583	2.921	4.015
17	1.333	1.740	2.110	2.567	2.898	3.965
18	1.330	1.734	2.101	2.552	2.878	3.922
19	1.328	1.729	2.093	2.539	2.861	3.883
20	1.325	1.725	2.086	2.528	2.845	3.850
21	1.323	1.721	2.080	2.518	2.831	3.819
22	1.321	1.717	2.074	2.508	2.819	3.792
23	1.319	1.714	2.069	2.500	2.807	3.768
24	1.318	1.711	2.064	2.492	2.797	3.745
25	1.316	1.708	2.060	2.485	2.787	3.725
26	1.315	1.706	2.056	2.479	2.779	3.707
27	1.314	1.703	2.052	2.473	2.771	3.690
28	1.313	1.701	2.048	2.467	2.763	3.674
29	1.311	1.699	2.045	2.462	2.756	3.659
30	1.310	1.697	2.042	2.457	2.750	3.646
31	1.309	1.696	2.040	2.453	2.744	3.633
32	1.309	1.694	2.037	2.449	2.738	3.622
33	1.308	1.692	2.035	2.445	2.733	3.611
34	1.307	1.691	2.032	2.441	2.728	3.601
35	1.306	1.690	2.030	2.438	2.724	3.591

Confidence Intervals, c						
df	80%	90%	95%	98%	99%	99.9%
	Level of Significance for One-Tailed Test, α					
	0.10	0.05	0.025	0.01	0.005	0.0005
	Level of Significance for Two-Tailed Test, α					
	0.20	0.10	0.05	0.02	0.01	0.001
36	1.306	1.688	2.028	2.434	2.719	3.582
37	1.305	1.687	2.026	2.431	2.715	3.574
38	1.304	1.686	2.024	2.429	2.712	3.566
39	1.304	1.685	2.023	2.426	2.708	3.558
40	1.303	1.684	2.021	2.423	2.704	3.551
41	1.303	1.683	2.020	2.421	2.701	3.544
42	1.302	1.682	2.018	2.418	2.698	3.538
43	1.302	1.681	2.017	2.416	2.695	3.532
44	1.301	1.680	2.015	2.414	2.692	3.526
45	1.301	1.679	2.014	2.412	2.690	3.520
46	1.300	1.679	2.013	2.410	2.687	3.515
47	1.300	1.678	2.012	2.408	2.685	3.510
48	1.299	1.677	2.011	2.407	2.682	3.505
49	1.299	1.677	2.010	2.405	2.680	3.500
50	1.299	1.676	2.009	2.403	2.678	3.496
51	1.298	1.675	2.008	2.402	2.676	3.492
52	1.298	1.675	2.007	2.400	2.674	3.488
53	1.298	1.674	2.006	2.399	2.672	3.484
54	1.297	1.674	2.005	2.397	2.670	3.480
55	1.297	1.673	2.004	2.396	2.668	3.476
56	1.297	1.673	2.003	2.395	2.667	3.473
57	1.297	1.672	2.002	2.394	2.665	3.470
58	1.296	1.672	2.002	2.392	2.663	3.466
59	1.296	1.671	2.001	2.391	2.662	3.463
60	1.296	1.671	2.000	2.390	2.660	3.460
61	1.296	1.670	2.000	2.389	2.659	3.457
62	1.295	1.670	1.999	2.388	2.657	3.454
63	1.295	1.669	1.998	2.387	2.656	3.452
64	1.295	1.669	1.998	2.386	2.655	3.449
65	1.295	1.669	1.997	2.385	2.654	3.447
66	1.295	1.668	1.997	2.384	2.652	3.444
67	1.294	1.668	1.996	2.383	2.651	3.442
68	1.294	1.668	1.995	2.382	2.650	3.439
69	1.294	1.667	1.995	2.382	2.649	3.437
70	1.294	1.667	1.994	2.381	2.648	3.435

Example:
 If $z = 1.96$, then
 $P(0 \text{ to } z) = 0.4750$.



z	0.00	0.01	0.02	0.03	0.04	0.05	0.06	0.07	0.08	0.09
0.0	0.0000	0.0040	0.0080	0.0120	0.0160	0.0199	0.0239	0.0279	0.0319	0.0359
0.1	0.0398	0.0438	0.0478	0.0517	0.0557	0.0596	0.0636	0.0675	0.0714	0.0753
0.2	0.0793	0.0832	0.0871	0.0910	0.0948	0.0987	0.1026	0.1064	0.1103	0.1141
0.3	0.1179	0.1217	0.1255	0.1293	0.1331	0.1368	0.1406	0.1443	0.1480	0.1517
0.4	0.1554	0.1591	0.1628	0.1664	0.1700	0.1736	0.1772	0.1808	0.1844	0.1879
0.5	0.1915	0.1950	0.1985	0.2019	0.2054	0.2088	0.2123	0.2157	0.2190	0.2224
0.6	0.2257	0.2291	0.2324	0.2357	0.2389	0.2422	0.2454	0.2486	0.2517	0.2549
0.7	0.2580	0.2611	0.2642	0.2673	0.2704	0.2734	0.2764	0.2794	0.2823	0.2852
0.8	0.2881	0.2910	0.2939	0.2967	0.2995	0.3023	0.3051	0.3078	0.3106	0.3133
0.9	0.3159	0.3186	0.3212	0.3238	0.3264	0.3289	0.3315	0.3340	0.3365	0.3389
1.0	0.3413	0.3438	0.3461	0.3485	0.3508	0.3531	0.3554	0.3577	0.3599	0.3621
1.1	0.3643	0.3665	0.3686	0.3708	0.3729	0.3749	0.3770	0.3790	0.3810	0.3830
1.2	0.3849	0.3869	0.3888	0.3907	0.3925	0.3944	0.3962	0.3980	0.3997	0.4015
1.3	0.4032	0.4049	0.4066	0.4082	0.4099	0.4115	0.4131	0.4147	0.4162	0.4177
1.4	0.4192	0.4207	0.4222	0.4236	0.4251	0.4265	0.4279	0.4292	0.4306	0.4319
1.5	0.4332	0.4345	0.4357	0.4370	0.4382	0.4394	0.4406	0.4418	0.4429	0.4441
1.6	0.4452	0.4463	0.4474	0.4484	0.4495	0.4505	0.4515	0.4525	0.4535	0.4545
1.7	0.4554	0.4564	0.4573	0.4582	0.4591	0.4599	0.4608	0.4616	0.4625	0.4633
1.8	0.4641	0.4649	0.4656	0.4664	0.4671	0.4678	0.4686	0.4693	0.4699	0.4706
1.9	0.4713	0.4719	0.4726	0.4732	0.4738	0.4744	0.4750	0.4756	0.4761	0.4767
2.0	0.4772	0.4778	0.4783	0.4788	0.4793	0.4798	0.4803	0.4808	0.4812	0.4817
2.1	0.4821	0.4826	0.4830	0.4834	0.4838	0.4842	0.4846	0.4850	0.4854	0.4857
2.2	0.4861	0.4864	0.4868	0.4871	0.4875	0.4878	0.4881	0.4884	0.4887	0.4890
2.3	0.4893	0.4896	0.4898	0.4901	0.4904	0.4906	0.4909	0.4911	0.4913	0.4916
2.4	0.4918	0.4920	0.4922	0.4925	0.4927	0.4929	0.4931	0.4932	0.4934	0.4936
2.5	0.4938	0.4940	0.4941	0.4943	0.4945	0.4946	0.4948	0.4949	0.4951	0.4952
2.6	0.4953	0.4955	0.4956	0.4957	0.4959	0.4960	0.4961	0.4962	0.4963	0.4964
2.7	0.4965	0.4966	0.4967	0.4968	0.4969	0.4970	0.4971	0.4972	0.4973	0.4974
2.8	0.4974	0.4975	0.4976	0.4977	0.4977	0.4978	0.4979	0.4979	0.4980	0.4981
2.9	0.4981	0.4982	0.4982	0.4983	0.4984	0.4984	0.4985	0.4985	0.4986	0.4986
3.0	0.4987	0.4987	0.4987	0.4988	0.4988	0.4989	0.4989	0.4989	0.4990	0.4990



	Degrees of Freedom for the Numerator															
	1	2	3	4	5	6	7	8	9	10	12	15	20	24	30	40
1	4052	5000	5403	5625	5764	5859	5928	5981	6022	6056	6106	6157	6209	6235	6261	6287
2	98.5	99.0	99.2	99.2	99.3	99.3	99.4	99.4	99.4	99.4	99.4	99.4	99.4	99.5	99.5	99.5
3	34.1	30.8	29.5	28.7	28.2	27.9	27.7	27.5	27.3	27.2	27.1	26.9	26.7	26.6	26.5	26.4
4	21.2	18.0	16.7	16.0	15.5	15.2	15.0	14.8	14.7	14.5	14.4	14.2	14.0	13.9	13.8	13.7
5	16.3	13.3	12.1	11.4	11.0	10.7	10.5	10.3	10.2	10.1	9.89	9.72	9.55	9.47	9.38	9.29
6	13.7	10.9	9.78	9.15	8.75	8.47	8.26	8.10	7.98	7.87	7.72	7.56	7.40	7.31	7.23	7.14
7	12.2	9.55	8.45	7.85	7.46	7.19	6.99	6.84	6.72	6.62	6.47	6.31	6.16	6.07	5.99	5.91
8	11.3	8.65	7.59	7.01	6.63	6.37	6.18	6.03	5.91	5.81	5.67	5.52	5.36	5.28	5.20	5.12
9	10.6	8.02	6.99	6.42	6.06	5.80	5.61	5.47	5.35	5.26	5.11	4.96	4.81	4.73	4.65	4.57
10	10.0	7.56	6.55	5.99	5.64	5.39	5.20	5.06	4.94	4.85	4.71	4.56	4.41	4.33	4.25	4.17
11	9.65	7.21	6.22	5.67	5.32	5.07	4.89	4.74	4.63	4.54	4.40	4.25	4.10	4.02	3.94	3.86
12	9.33	6.93	5.95	5.41	5.06	4.82	4.64	4.50	4.39	4.30	4.16	4.01	3.86	3.78	3.70	3.62
13	9.07	6.70	5.74	5.21	4.86	4.62	4.44	4.30	4.19	4.10	3.96	3.82	3.66	3.59	3.51	3.43
14	8.86	6.51	5.56	5.04	4.69	4.46	4.28	4.14	4.03	3.94	3.80	3.66	3.51	3.43	3.35	3.27
15	8.68	6.36	5.42	4.89	4.56	4.32	4.14	4.00	3.89	3.80	3.67	3.52	3.37	3.29	3.21	3.13
16	8.53	6.23	5.29	4.77	4.44	4.20	4.03	3.89	3.78	3.69	3.55	3.41	3.26	3.18	3.10	3.02
17	8.40	6.11	5.18	4.67	4.34	4.10	3.93	3.79	3.68	3.59	3.46	3.31	3.16	3.08	3.00	2.92
18	8.29	6.01	5.09	4.58	4.25	4.01	3.84	3.71	3.60	3.51	3.37	3.23	3.08	3.00	2.92	2.84
19	8.18	5.93	5.01	4.50	4.17	3.94	3.77	3.63	3.52	3.43	3.30	3.15	3.00	2.92	2.84	2.76
20	8.10	5.85	4.94	4.43	4.10	3.87	3.70	3.56	3.46	3.37	3.23	3.09	2.94	2.86	2.78	2.69
21	8.02	5.78	4.87	4.37	4.04	3.81	3.64	3.51	3.40	3.31	3.17	3.03	2.88	2.80	2.72	2.64
22	7.95	5.72	4.82	4.31	3.99	3.76	3.59	3.45	3.35	3.26	3.12	2.98	2.83	2.75	2.67	2.58
23	7.88	5.66	4.76	4.26	3.94	3.71	3.54	3.41	3.30	3.21	3.07	2.93	2.78	2.70	2.62	2.54
24	7.82	5.61	4.72	4.22	3.90	3.67	3.50	3.36	3.26	3.17	3.03	2.89	2.74	2.66	2.58	2.49
25	7.77	5.57	4.68	4.18	3.85	3.63	3.46	3.32	3.22	3.13	2.99	2.85	2.70	2.62	2.54	2.45

Degrees of Freedom for the Denominator